

Please check the examination details below before entering your candidate information

Candidate surname

Other names

Centre Number

Candidate Number

--	--	--	--	--

--	--	--	--

Pearson Edexcel International GCSE

Time 2 hours

Paper
reference

4PM1/01R

Further Pure Mathematics PAPER 1R



Calculators may be used.

Total Marks

Instructions

- Use **black** ink or ball-point pen.
- **Fill in the boxes** at the top of this page with your name, centre number and candidate number.
- Answer **all** questions.
- Without sufficient working, correct answers may be awarded no marks.
- Answer the questions in the spaces provided
– *there may be more space than you need.*
- You must **NOT** write anything on the formulae page.
Anything you write on the formulae page will gain NO credit.

Information

- The total mark for this paper is 100.
- The marks for **each** question are shown in brackets
– *use this as a guide as to how much time to spend on each question.*

Advice

- Read each question carefully before you start to answer it.
- Check your answers if you have time at the end.

Turn over ►

P66309A

©2022 Pearson Education Ltd.

L:1/1/1/1/



Pearson

International GCSE in Further Pure Mathematics Formulae sheet

Mensuration

Surface area of sphere = $4\pi r^2$

Curved surface area of cone = $\pi r \times$ slant height

Volume of sphere = $\frac{4}{3}\pi r^3$

Series

Arithmetic series

Sum to n terms, $S_n = \frac{n}{2}[2a + (n - 1)d]$

Geometric series

Sum to n terms, $S_n = \frac{a(1 - r^n)}{(1 - r)}$

Sum to infinity, $S_\infty = \frac{a}{1 - r}$ $|r| < 1$

Binomial series

$$(1 + x)^n = 1 + nx + \frac{n(n-1)}{2!}x^2 + \dots + \frac{n(n-1)\dots(n-r+1)}{r!}x^r + \dots \quad \text{for } |x| < 1, n \in \mathbb{Q}$$

Calculus

Quotient rule (differentiation)

$$\frac{d}{dx} \left(\frac{f(x)}{g(x)} \right) = \frac{f'(x)g(x) - f(x)g'(x)}{[g(x)]^2}$$

Trigonometry

Cosine rule

In triangle ABC : $a^2 = b^2 + c^2 - 2bc \cos A$

$$\tan \theta = \frac{\sin \theta}{\cos \theta}$$

$$\sin(A + B) = \sin A \cos B + \cos A \sin B$$

$$\sin(A - B) = \sin A \cos B - \cos A \sin B$$

$$\cos(A + B) = \cos A \cos B - \sin A \sin B$$

$$\cos(A - B) = \cos A \cos B + \sin A \sin B$$

$$\tan(A + B) = \frac{\tan A + \tan B}{1 - \tan A \tan B}$$

$$\tan(A - B) = \frac{\tan A - \tan B}{1 + \tan A \tan B}$$

Logarithms

$$\log_a x = \frac{\log_b x}{\log_b a}$$

DO NOT WRITE IN THIS AREA

DO NOT WRITE IN THIS AREA

DO NOT WRITE IN THIS AREA



Answer all ELEVEN questions.

Write your answers in the spaces provided.

You must write down all the stages in your working.

1 (a) On the grid below, draw the graph of the line with equation

(i) $4x + 5y = 20$

(ii) $3y - 4x = -12$

(2)

(b) Show, by shading on the grid, the region R defined by the inequalities

$4x + 5y \leq 20$

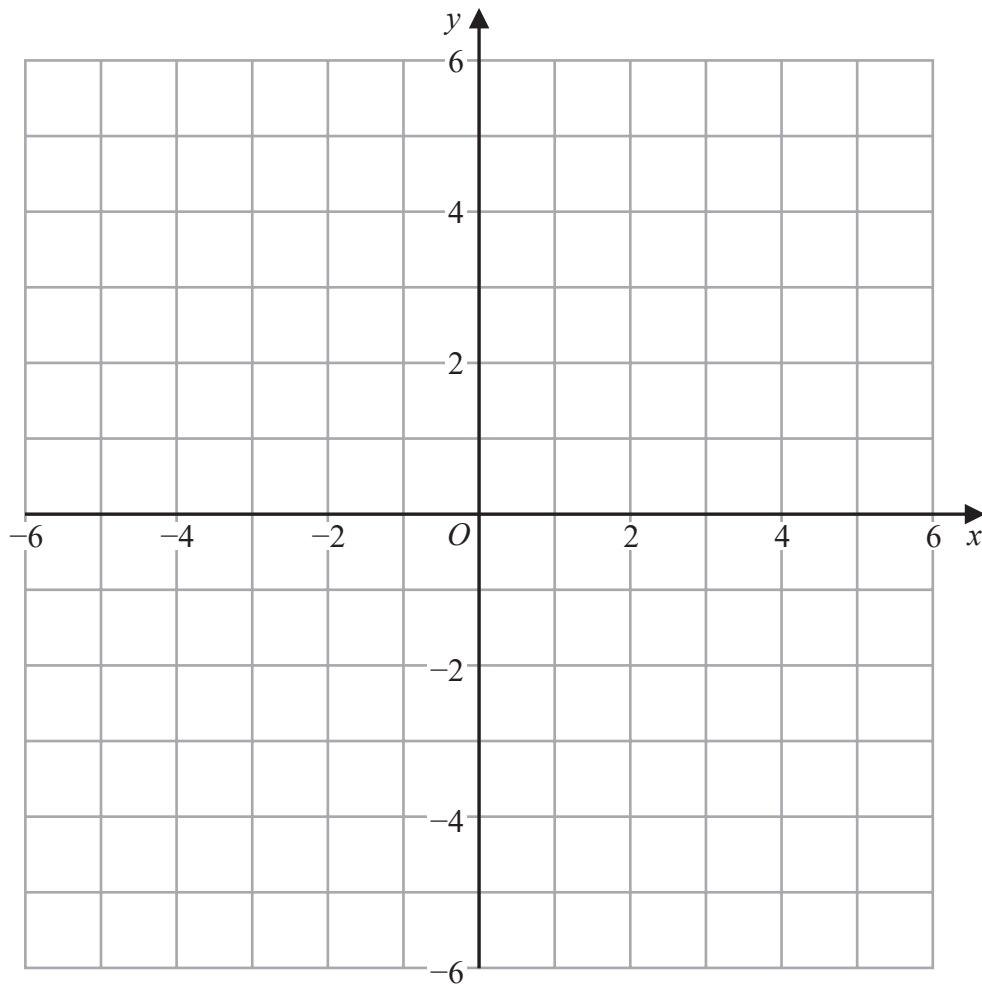
$3y - 4x \geq -12$

$y \leq 3$

$x \geq 1$

Label the region R .

(2)



Turn over for a spare grid if you need to redraw your graph.



Question 1 continued

Area with horizontal dotted lines for writing.

DO NOT WRITE IN THIS AREA

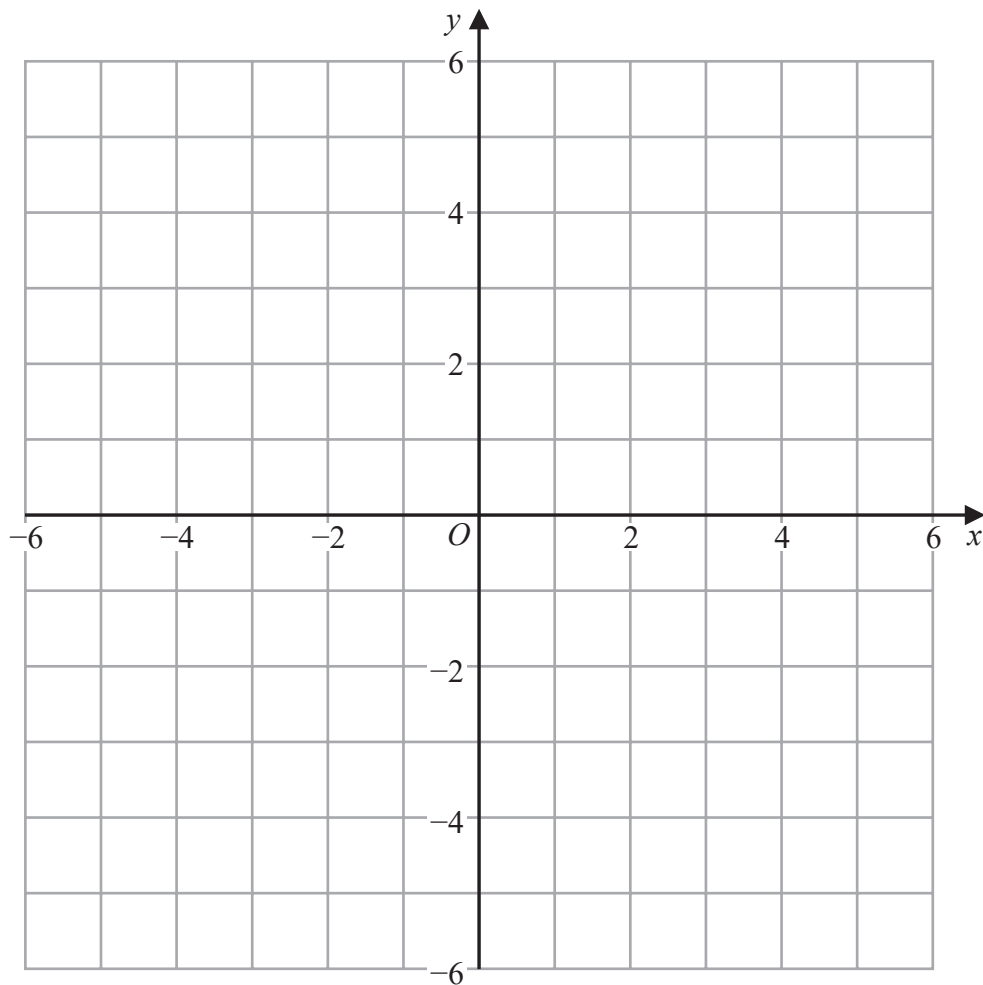
DO NOT WRITE IN THIS AREA

DO NOT WRITE IN THIS AREA



Question 1 continued

Only use this grid if you need to redraw your graph.



.....

.....

.....

.....

.....

.....

.....

.....

.....

.....

.....

(Total for Question 1 is 4 marks)

DO NOT WRITE IN THIS AREA

DO NOT WRITE IN THIS AREA

DO NOT WRITE IN THIS AREA



Question 2 continued

DO NOT WRITE IN THIS AREA

DO NOT WRITE IN THIS AREA

DO NOT WRITE IN THIS AREA

Area with horizontal dotted lines for writing.

(Total for Question 2 is 8 marks)



Question 3 continued

DO NOT WRITE IN THIS AREA

DO NOT WRITE IN THIS AREA

DO NOT WRITE IN THIS AREA

Area with horizontal dotted lines for writing.

(Total for Question 3 is 10 marks)



P 6 6 3 0 9 A 0 9 3 6

Question 4 continued

DO NOT WRITE IN THIS AREA

DO NOT WRITE IN THIS AREA

DO NOT WRITE IN THIS AREA

Area with horizontal dotted lines for writing.

(Total for Question 4 is 8 marks)



P 6 6 3 0 9 A 0 1 1 3 6

Question 5 continued

DO NOT WRITE IN THIS AREA

DO NOT WRITE IN THIS AREA

DO NOT WRITE IN THIS AREA

Area with horizontal dotted lines for writing.

(Total for Question 5 is 8 marks)



P 6 6 3 0 9 A 0 1 3 3 6

Question 6 continued

DO NOT WRITE IN THIS AREA

DO NOT WRITE IN THIS AREA

DO NOT WRITE IN THIS AREA

Handwriting practice area with 25 horizontal dotted lines.



P 6 6 3 0 9 A 0 1 5 3 6

Question 6 continued

Area with horizontal dotted lines for writing.

DO NOT WRITE IN THIS AREA

DO NOT WRITE IN THIS AREA

DO NOT WRITE IN THIS AREA



Question 6 continued

DO NOT WRITE IN THIS AREA

DO NOT WRITE IN THIS AREA

DO NOT WRITE IN THIS AREA

Area with horizontal dotted lines for writing.

(Total for Question 6 is 10 marks)



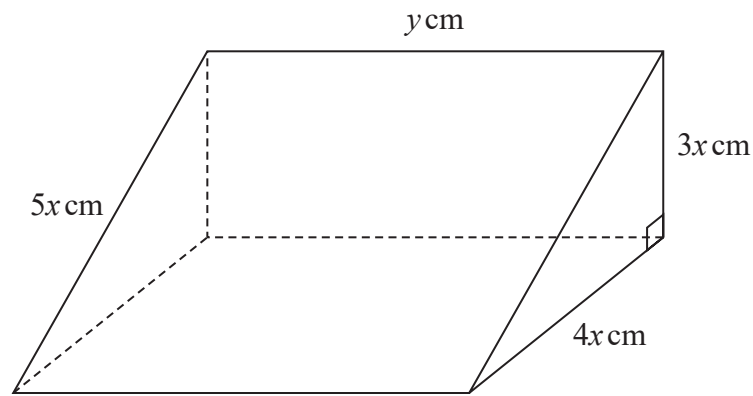


Diagram **NOT**
accurately drawn

Figure 2

Figure 2 shows a block of wood in the shape of a right triangular prism.

The cross section of the prism is a right-angled triangle with sides of length $3x$ cm, $4x$ cm and $5x$ cm.

The length of the prism is y cm.

The total surface area of the five faces of the prism is 144 cm^2

The volume of the prism is $V\text{ cm}^3$

(a) Show that

$$V = 72x - 6x^3 \quad (5)$$

Given that x can vary,

(b) use calculus to find the value of x for which V is a maximum, justifying that this value gives a maximum value of V

(4)

(c) Find the maximum value of V

(2)

.....

.....

.....

.....

.....

.....

.....

.....

.....

.....

DO NOT WRITE IN THIS AREA

DO NOT WRITE IN THIS AREA

DO NOT WRITE IN THIS AREA



Question 7 continued

DO NOT WRITE IN THIS AREA

DO NOT WRITE IN THIS AREA

DO NOT WRITE IN THIS AREA

Area with horizontal dotted lines for writing.



P 6 6 3 0 9 A 0 1 9 3 6

Question 7 continued

Area with horizontal dotted lines for writing.

DO NOT WRITE IN THIS AREA

DO NOT WRITE IN THIS AREA

DO NOT WRITE IN THIS AREA



Question 7 continued

DO NOT WRITE IN THIS AREA

DO NOT WRITE IN THIS AREA

DO NOT WRITE IN THIS AREA

Area with horizontal dotted lines for writing.

(Total for Question 7 is 11 marks)



P 6 6 3 0 9 A 0 2 1 3 6

8 The curve C has equation $y = 2x^2 - \sin x$

The point A on C has x coordinate π

Show that an equation of the normal to C at the point A is

$$x + (4\pi + 1)y - \pi(8\pi^2 + 2\pi + 1) = 0 \quad (8)$$

Area with horizontal dotted lines for writing the solution.



Question 8 continued

DO NOT WRITE IN THIS AREA

DO NOT WRITE IN THIS AREA

DO NOT WRITE IN THIS AREA

Area with horizontal dotted lines for writing.

(Total for Question 8 is 8 marks)



P 6 6 3 0 9 A 0 2 3 3 6

9 (a) Complete the table of values for

$$y = \frac{x^3 + 4}{5 - x}$$

giving your answers to 2 decimal places.

x	-2	-1.5	-1	-0.5	0	0.5	1	1.5	2
y	-0.57	0.10	0.5		0.8		1.25		4

(2)

(b) On the grid opposite, draw the graph of

$$y = \frac{x^3 + 4}{5 - x} \quad \text{for } -2 \leq x \leq 2$$

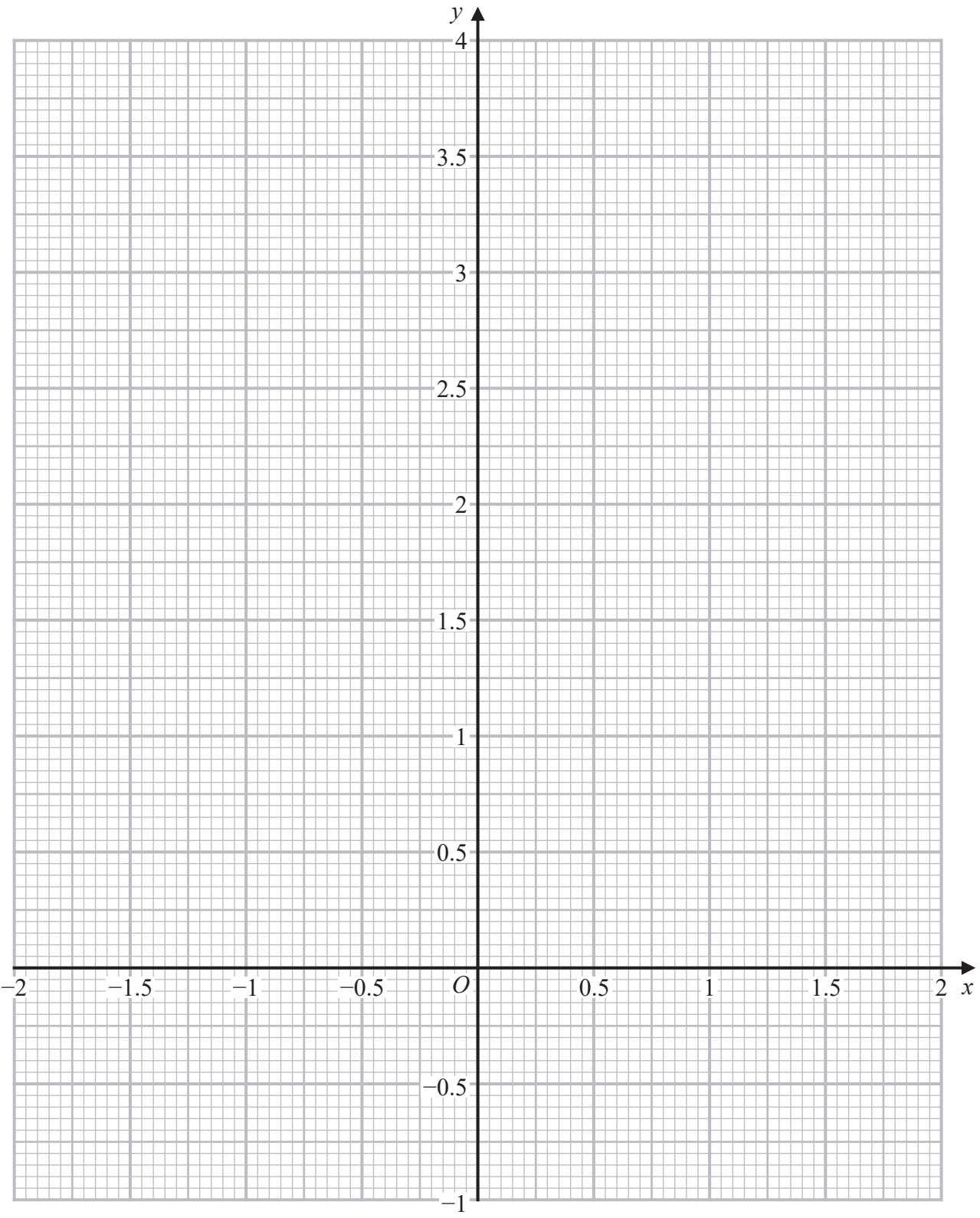
(2)

(c) By drawing a suitable straight line on the grid, obtain an estimate, to one decimal place, of the root of the equation $x^3 - x^2 + 8x - 11 = 0$ in the interval $-2 \leq x \leq 2$

(5)



Question 9 continued



DO NOT WRITE IN THIS AREA

DO NOT WRITE IN THIS AREA

DO NOT WRITE IN THIS AREA

.....

.....

.....

Turn over for a spare grid if you need to redraw your graph.



Question 9 continued

Area with horizontal dotted lines for writing.

DO NOT WRITE IN THIS AREA

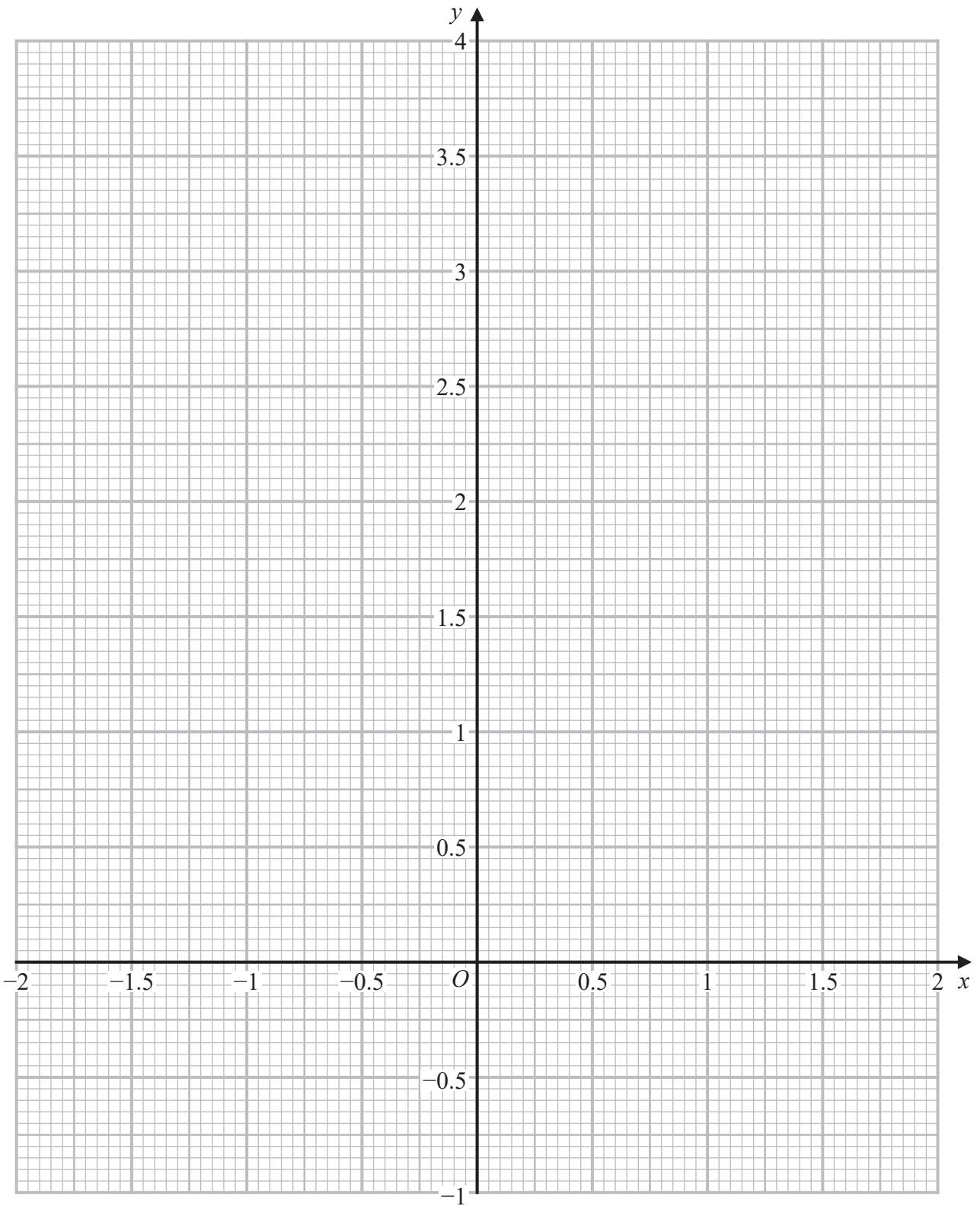
DO NOT WRITE IN THIS AREA

DO NOT WRITE IN THIS AREA



Question 9 continued

Only use this grid if you need to redraw your graph.



DO NOT WRITE IN THIS AREA

DO NOT WRITE IN THIS AREA

DO NOT WRITE IN THIS AREA

(Total for Question 9 is 9 marks)



10 (a) Use the factor theorem to show that $(4x - 3)$ is a factor of

$$16x^3 + 11x - 15 \quad (2)$$

(b) Using formulae given on page 2, show that

(i) $\sin 2\theta = 2 \sin \theta \cos \theta$

(ii) $\cos 2\theta = 2 \cos^2 \theta - 1$ (5)

(c) Show that the equation

$$27 \cos \theta \cos 2\theta + 19 \sin \theta \sin 2\theta - 15 = 0$$

becomes the equation

$$16x^3 + 11x - 15 = 0$$

by using the substitution $x = \cos \theta$

(4)

(d) Hence show that any solution of the equation

$$27 \cos \theta \cos 2\theta + 19 \sin \theta \sin 2\theta - 15 = 0$$

is given by $\cos \theta = \frac{3}{4}$

(4)

.....

.....

.....

.....

.....

.....

.....

.....

.....

.....

.....

.....

.....

.....

.....

.....

.....

.....

.....

.....

.....

.....

.....



Question 10 continued

DO NOT WRITE IN THIS AREA

DO NOT WRITE IN THIS AREA

DO NOT WRITE IN THIS AREA

Area with horizontal dotted lines for writing.



Question 10 continued

Area with horizontal dotted lines for writing.

DO NOT WRITE IN THIS AREA

DO NOT WRITE IN THIS AREA

DO NOT WRITE IN THIS AREA



Question 10 continued

DO NOT WRITE IN THIS AREA

DO NOT WRITE IN THIS AREA

DO NOT WRITE IN THIS AREA

Area with horizontal dotted lines for writing.

(Total for Question 10 is 15 marks)



P 6 6 3 0 9 A 0 3 1 3 6

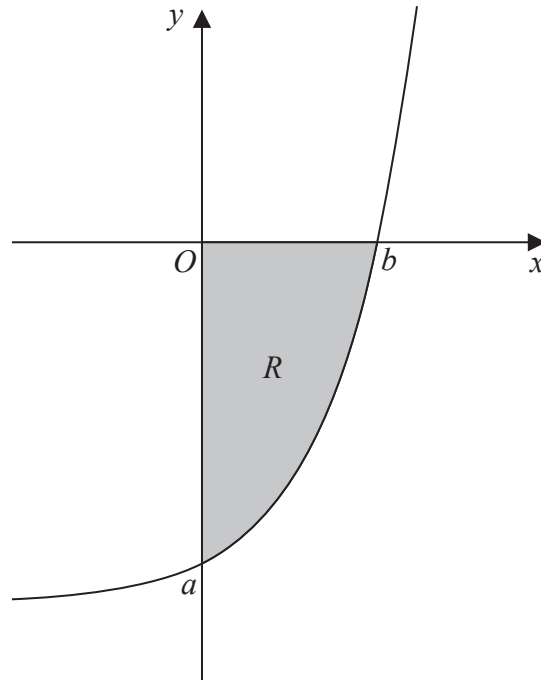


Diagram NOT accurately drawn

Figure 3

The finite region R , shown shaded in Figure 3, is bounded by the curve with equation $y = e^{2x} - 9$ and the coordinate axes.

The curve crosses the coordinate axes at the points with coordinates $(0, a)$ and $(b, 0)$

- (a) (i) Find the value of a
- (ii) Show that $b = \ln 3$

(3)

The region R is rotated through 360° about the x -axis.

- (b) Use calculus to find the volume of the solid generated.

Give your answer in the form $\pi(p \ln 3 + q)$, where p and q are integers.

(6)

.....

.....

.....

.....

.....

.....

.....

.....

.....

.....

DO NOT WRITE IN THIS AREA

DO NOT WRITE IN THIS AREA

DO NOT WRITE IN THIS AREA



Question 11 continued

DO NOT WRITE IN THIS AREA

DO NOT WRITE IN THIS AREA

DO NOT WRITE IN THIS AREA

Area with horizontal dotted lines for writing.



P 6 6 3 0 9 A 0 3 3 3 6

Question 11 continued

DO NOT WRITE IN THIS AREA

DO NOT WRITE IN THIS AREA

DO NOT WRITE IN THIS AREA

Area with horizontal dotted lines for writing.



P 6 6 3 0 9 A 0 3 5 3 6

