

© International Baccalaureate Organization 2025

All rights reserved. No part of this product may be reproduced in any form or by any electronic or mechanical means, including information storage and retrieval systems, without the prior written permission from the IB. Additionally, the license tied with this product prohibits use of any selected files or extracts from this product. Use by third parties, including but not limited to publishers, private teachers, tutoring or study services, preparatory schools, vendors operating curriculum mapping services or teacher resource digital platforms and app developers, whether fee-covered or not, is prohibited and is a criminal offense.

More information on how to request written permission in the form of a license can be obtained from <https://ibo.org/become-an-ib-school/ib-publishing/licensing/applying-for-a-license/>.

© Organisation du Baccalauréat International 2025

Tous droits réservés. Aucune partie de ce produit ne peut être reproduite sous quelque forme ni par quelque moyen que ce soit, électronique ou mécanique, y compris des systèmes de stockage et de récupération d'informations, sans l'autorisation écrite préalable de l'IB. De plus, la licence associée à ce produit interdit toute utilisation de tout fichier ou extrait sélectionné dans ce produit. L'utilisation par des tiers, y compris, sans toutefois s'y limiter, des éditeurs, des professeurs particuliers, des services de tutorat ou d'aide aux études, des établissements de préparation à l'enseignement supérieur, des fournisseurs de services de planification des programmes d'études, des gestionnaires de plateformes pédagogiques en ligne, et des développeurs d'applications, moyennant paiement ou non, est interdite et constitue une infraction pénale.

Pour plus d'informations sur la procédure à suivre pour obtenir une autorisation écrite sous la forme d'une licence, rendez-vous à l'adresse <https://ibo.org/become-an-ib-school/ib-publishing/licensing/applying-for-a-license/>.

© Organización del Bachillerato Internacional, 2025

Todos los derechos reservados. No se podrá reproducir ninguna parte de este producto de ninguna forma ni por ningún medio electrónico o mecánico, incluidos los sistemas de almacenamiento y recuperación de información, sin la previa autorización por escrito del IB. Además, la licencia vinculada a este producto prohíbe el uso de todo archivo o fragmento seleccionado de este producto. El uso por parte de terceros —lo que incluye, a título enunciativo, editoriales, profesores particulares, servicios de apoyo académico o ayuda para el estudio, colegios preparatorios, desarrolladores de aplicaciones y entidades que presten servicios de planificación curricular u ofrezcan recursos para docentes mediante plataformas digitales—, ya sea incluido en tasas o no, está prohibido y constituye un delito.

En este enlace encontrará más información sobre cómo solicitar una autorización por escrito en forma de licencia: <https://ibo.org/become-an-ib-school/ib-publishing/licensing/applying-for-a-license/>.

# Physics

## Higher level

### Paper 1A

29 April 2025

**Zone A** afternoon | **Zone B** afternoon | **Zone C** afternoon

2 hours [Paper 1A and Paper 1B]

---

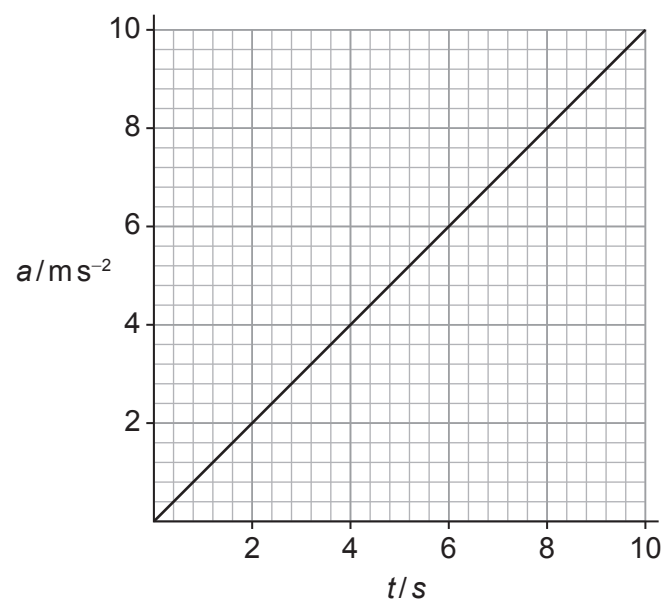
#### Instructions to candidates

- Do not open this examination paper until instructed to do so.
- Answer all questions.
- For each question, choose the answer you consider to be the best and indicate your choice on the answer sheet provided.
- A calculator is required for this paper.
- A clean copy of the **physics data booklet** is required for this paper.
- The maximum mark for paper 1A is **[40 marks]**.
- The maximum mark for paper 1A and paper 1B is **[60 marks]**.

1. Instantaneous velocity is defined as...

- A.  $\frac{\text{displacement}}{\text{time taken}}$ .
- B. rate of change of position.
- C.  $\frac{\text{distance moved}}{\text{time taken}}$ .
- D. rate of change of distance.

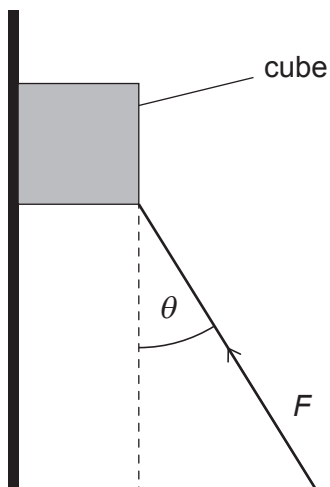
2. The variation with time  $t$  of the acceleration  $a$  of an object is shown. At  $t = 0$  the object is at rest.



What is the speed of the object when  $t = 8.0$  s?

- A.  $1.0 \text{ ms}^{-1}$
- B.  $32 \text{ ms}^{-1}$
- C.  $50 \text{ ms}^{-1}$
- D.  $64 \text{ ms}^{-1}$

3. A force acts on a cube of mass  $m$  that accelerates upwards along a vertical frictionless surface. The magnitude of the force is  $F$  and it acts at  $\theta$  to the vertical.



What is the magnitude of the acceleration of the cube?

- A.  $\frac{(F \cos \theta - mg)}{m}$
- B.  $\frac{(F \sin \theta - mg)}{m}$
- C.  $\frac{(F \cos \theta - g)}{m}$
- D.  $\frac{(F \sin \theta - g)}{m}$
4. A sphere of density  $\rho$  and radius  $R$  rests on the bottom of a tank of water. The buoyancy force on the sphere is  $F_1$ .

A sphere of density  $2\rho$  and radius  $\frac{R}{2}$  is at the bottom of the same tank. The buoyancy force on the second sphere is  $F_2$ .

What is  $\frac{F_1}{F_2}$ ?

- A. 2
- B. 4
- C. 8
- D. 16

5. A satellite undergoes one circular orbit of the Earth every 24 hours.

What is the angular velocity of the satellite?

- A.  $4.4 \times 10^{-3} \text{ rad s}^{-1}$
- B.  $1.7 \times 10^{-3} \text{ rad s}^{-1}$
- C.  $7.3 \times 10^{-5} \text{ rad s}^{-1}$
- D.  $1.2 \times 10^{-5} \text{ rad s}^{-1}$

6. An object of mass 5.0 kg is initially at rest. An impulse of 2.0 N s acts on the object.

What is the final kinetic energy of the object?

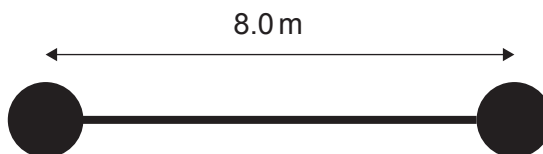
- A. 0.40 J
- B. 10 J
- C. 20 J
- D. 40 J

7. A system of moment of inertia  $I$  rotates from rest about a given axis. The angular acceleration  $\alpha$  of the system is constant.

What is the change in angular momentum when the system has made four complete rotations about the given axis?

- A.  $2I\sqrt{2\pi\alpha}$
- B.  $4I\sqrt{\pi\alpha}$
- C.  $2I\sqrt{2\alpha}$
- D.  $4I\sqrt{\alpha}$

8. Two small spheres each of mass  $10\text{ kg}$  are  $8.0\text{ m}$  apart and connected by a rod of negligible mass. This system rotates about an axis halfway along the rod and at right angles to it.

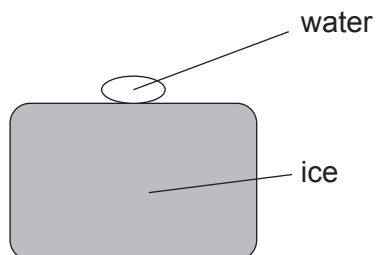


What is the moment of inertia of the system?

- A.  $160\text{ kg m}^2$   
B.  $320\text{ kg m}^2$   
C.  $640\text{ kg m}^2$   
D.  $1280\text{ kg m}^2$
9. Observer X sees a spacecraft moving in the positive  $x$ -direction at a speed of  $0.50c$ . Observer Y sees the same spacecraft moving in the negative  $x$ -direction at a speed of  $0.50c$ . What is the speed of Y in the frame of reference of X?
- A.  $0$   
B.  $0.80c$   
C.  $c$   
D.  $1.3c$

10. A block of ice of mass  $M$  is at its melting point.

A smaller mass  $m$  of water at a temperature of  $T^{\circ}\text{C}$  is placed on the top surface of the ice and remains there.

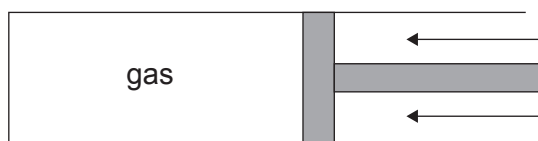


The specific latent heat of fusion of ice is  $L$  and the specific heat capacity of water is  $c$ .

What mass of ice melts?

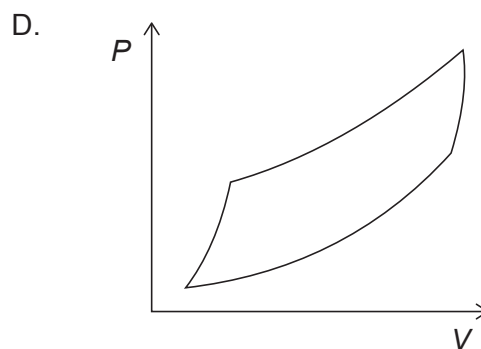
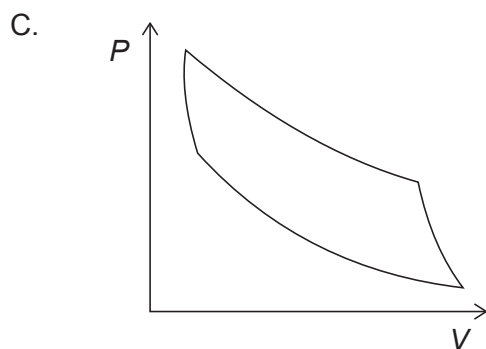
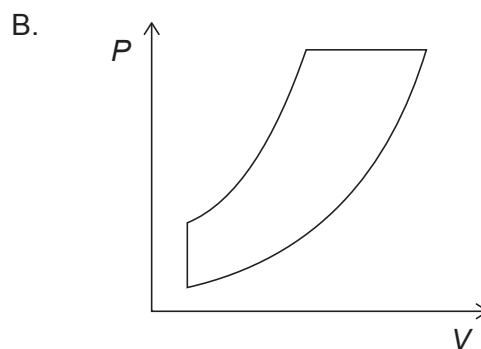
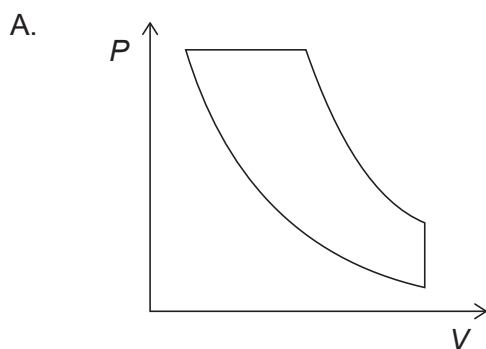
- A.  $\frac{mcT}{L}$
  - B.  $\frac{mLT}{c}$
  - C.  $\frac{McT}{L}$
  - D.  $\frac{MLT}{c}$
11. What is a primary cause of the enhanced greenhouse effect?
- A. Melting of ice at Earth's poles
  - B. Increases in volcanic activity
  - C. Deforestation of rainforests
  - D. Burning of fossil fuels

12. An ideal gas is held in a cylinder by a piston. The piston compresses the gas rapidly.



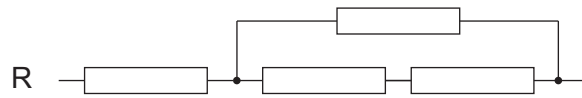
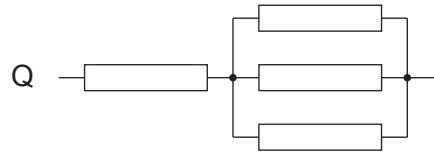
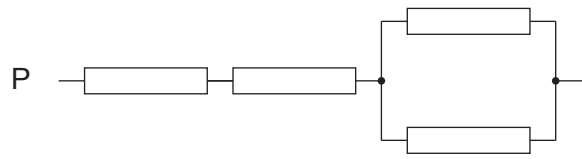
The average speed of the gas molecules increases because the gas molecules...

- A. have a smaller volume available in which they can move.
  - B. receive thermal energy transferred from outside the cylinder.
  - C. receive energy from the piston as they collide with it.
  - D. make more collisions every second with each other.
13. Which pressure–volume ( $P$ – $V$ ) diagram represents a Carnot cycle?





14. Three combinations of resistors are shown. The resistors are identical.

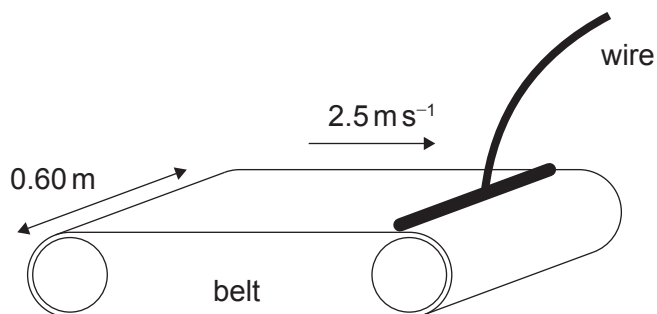


What is the total resistance of each combination of resistors in order of **increasing** resistance?

- A. P Q R
- B. Q P R
- C. P R Q
- D. Q R P

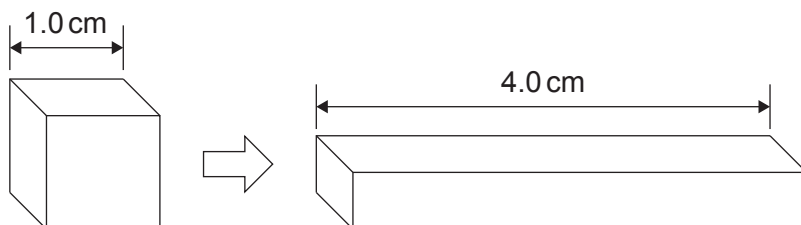
15. A continuous belt of width 0.60 m travels at a constant speed of  $2.5 \text{ m s}^{-1}$ . The belt has a uniform distribution of charge of  $5.0 \text{ mC m}^{-2}$  on its surface.

As the belt passes a point all the charge is removed and is carried as a current in a wire.



What is the current in the wire?

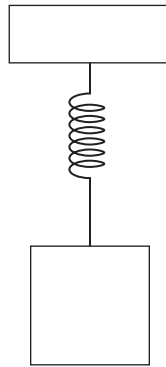
- A. 1.2 mA
  - B. 7.5 mA
  - C. 19 mA
  - D. 21 mA
16. A cube of side 1.0 cm has a resistance between opposite sides of  $50 \Omega$ .  
The material is reshaped into a block of length 4.0 cm and constant square cross-section.



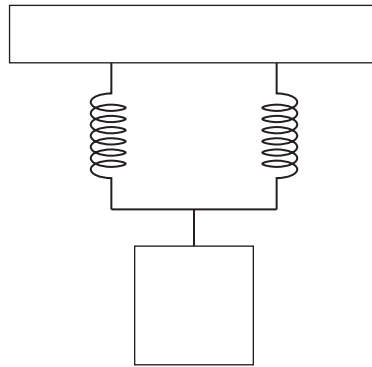
What is the resistance of the block between its square ends?

- A.  $3.1 \Omega$
- B.  $50 \Omega$
- C.  $800 \Omega$
- D.  $3200 \Omega$

17. A mass–spring system oscillates with time period  $T_1$ .



Another identical spring is connected in parallel with the first spring as shown. The mass is unchanged.

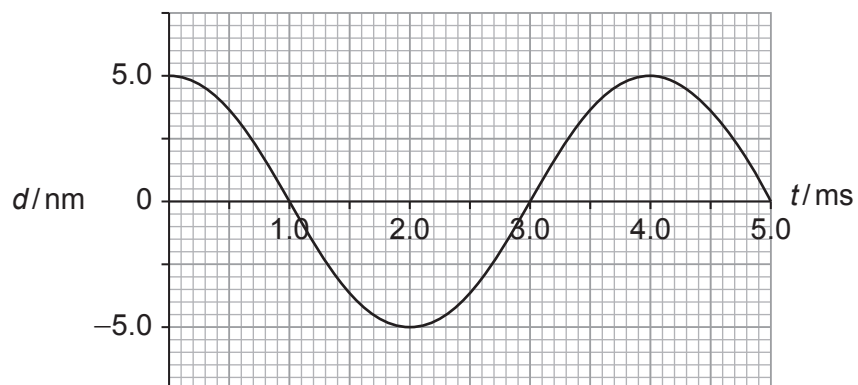


The time period of the oscillation for the two-spring system is  $T_2$ .

What is  $\frac{T_2}{T_1}$ ?

- A.  $\frac{1}{2}$
- B.  $\frac{1}{\sqrt{2}}$
- C.  $\sqrt{2}$
- D. 2

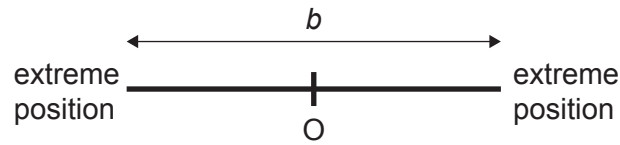
18. A wave is travelling through a medium. The variation with time  $t$  of the displacement  $d$  of a particle in the medium is shown.



What is the frequency and the amplitude of the wave?

	Frequency/Hz	Amplitude/nm
A.	$4.0 \times 10^{-3}$	5.0
B.	250	5.0
C.	$4.0 \times 10^{-3}$	10.0
D.	250	10.0

19. An object performs simple harmonic motion with frequency  $f$ . The distance between the extreme positions at which the object is at rest is  $b$ .



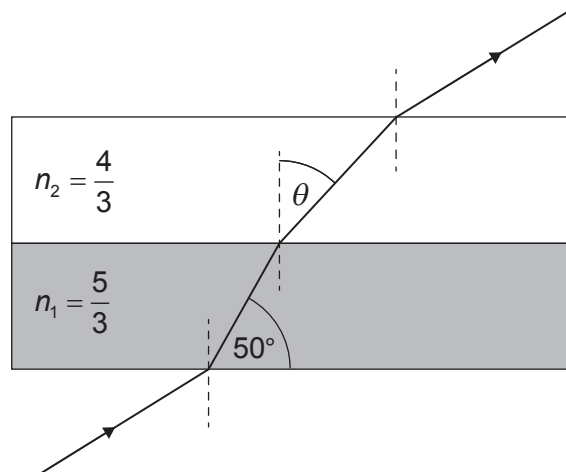
What is the speed of the object when it is halfway between its equilibrium position O and its extreme position?

- A.  $\frac{1}{4}\pi fb$
- B.  $\frac{1}{2}\pi fb$
- C.  $\frac{\sqrt{3}}{4}\pi fb$
- D.  $\frac{\sqrt{3}}{2}\pi fb$

20. Light passes through two parallel layers as shown.

The refractive indices for light travelling between air and the media are shown in the diagram as  $n_1$  and  $n_2$ .

diagram not to scale

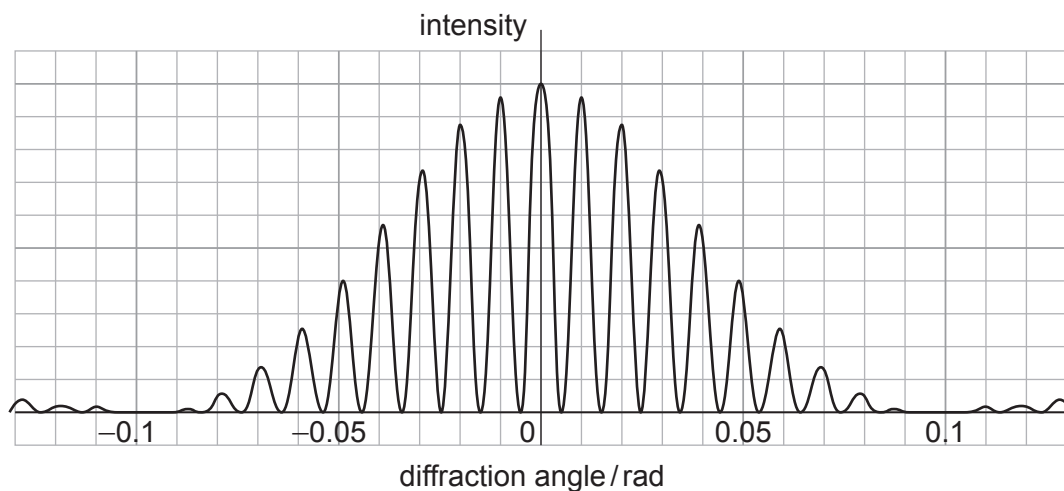


What is  $\theta$ ?

- A.  $31^\circ$
- B.  $38^\circ$
- C.  $53^\circ$
- D.  $73^\circ$

21. Light of wavelength  $\lambda$  is incident on two parallel slits of width  $b$  that are separated by distance  $d$ .

The graph of intensity against diffraction angle is shown.



What are  $\frac{\lambda}{d}$  and  $\frac{\lambda}{b}$  ?

	$\frac{\lambda}{d}$	$\frac{\lambda}{b}$
A.	0.1	0.1
B.	0.1	0.01
C.	0.01	0.1
D.	0.01	0.01

22. A pipe of length  $L$  is closed at one end.

What is the wavelength of the fifth-harmonic standing wave in this pipe?

- A.  $\frac{8L}{5}$
- B.  $\frac{5L}{4}$
- C.  $\frac{4L}{5}$
- D.  $\frac{5L}{8}$

23. Light of wavelength  $5.8 \times 10^{-7} \text{ m}$  is normally incident on a diffraction grating that has 400 000 lines  $\text{m}^{-1}$ .

How many maxima can be observed with this diffraction grating?

- A. 4
- B. 5
- C. 8
- D. 9

24. A planet P has a diameter one-third that of the Earth. The mass of Earth is 18 times that of P.

The gravitational field strength at the surface of the Earth is  $g$ .

What is the gravitational field strength at the surface of P?

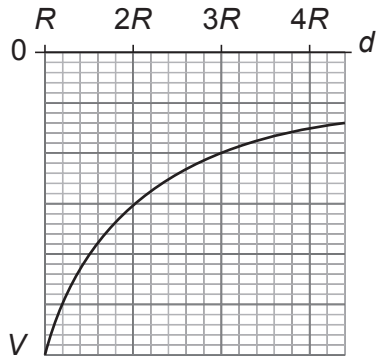
- A.  $\frac{g}{6}$
- B.  $\frac{g}{2}$
- C.  $2g$
- D.  $6g$



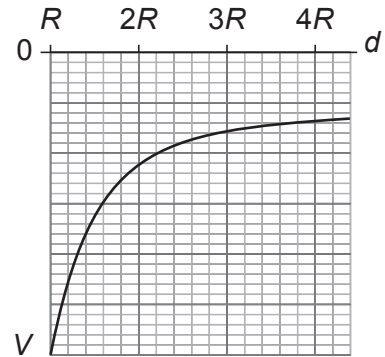
25. Which graph shows the variation of gravitational potential  $V$  with distance  $d$  from the surface of the Earth?

$R$  is the radius of the Earth.

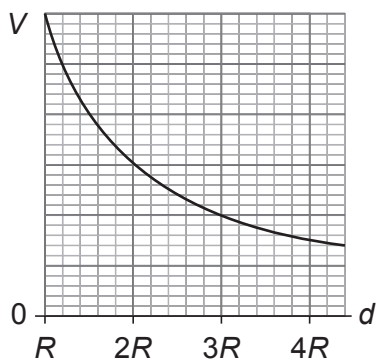
A.



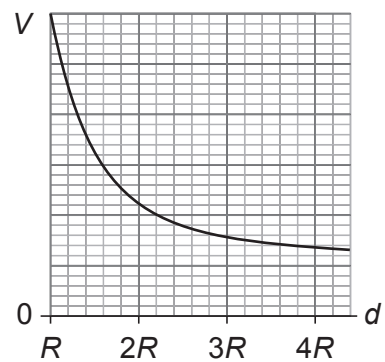
B.



C.



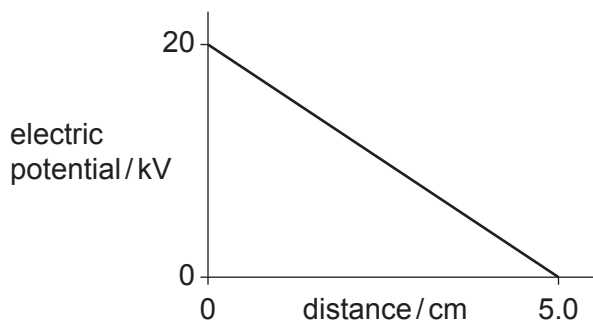
D.



26. The unit of  $\mu_0 \times \epsilon_0$  expressed in fundamental SI units is...

- A.  $\text{m}^{-2}\text{s}^2$ .
- B.  $\text{TCN}^{-1}\text{m}^{-1}\text{s}$ .
- C.  $\text{m}^2\text{s}^{-2}$ .
- D.  $\text{TC}^2\text{A}^{-1}\text{N}^{-1}\text{m}^{-1}$ .

27. Two parallel conducting plates are separated by 5.0 cm. The variation of electric potential with distance between the plates is shown.



What is the magnitude of the electric field strength between the plates?

- A.  $4.0 \text{ NC}^{-1}$
  - B.  $1.0 \times 10^3 \text{ NC}^{-1}$
  - C.  $1.0 \times 10^5 \text{ NC}^{-1}$
  - D.  $4.0 \times 10^5 \text{ NC}^{-1}$
28. Charge is moving in a wire that is at right angles to a uniform magnetic field.

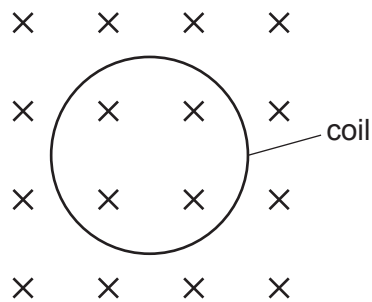
The length of the wire is 0.32 m.

When the current in the wire is increased by 5.0 A, the force acting on the wire increases by 4.0 mN.

What is the strength of the magnetic field?

- A. 2.5 mT
- B. 25 mT
- C. 40 T
- D. 40 kT

29. Negative charge carriers travel counter-clockwise in a circular coil that lies in the plane of the page. The coil is in a uniform magnetic field directed into the page.

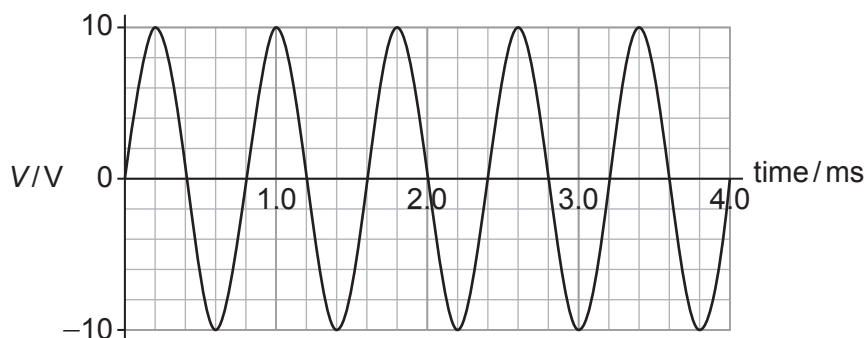


What is the magnetic effect on the coil?

- A. The coil will rotate clockwise in the plane of the paper.
  - B. The coil will rotate counter-clockwise in the plane of the paper.
  - C. The diameter of the coil will tend to increase.
  - D. The diameter of the coil will tend to decrease.
30. Who was the first scientist to show that electric charge is quantized?
- A. Coulomb
  - B. Millikan
  - C. Planck
  - D. Rutherford

31. A coil of wire rotates at a constant angular speed  $\omega$  in a uniform magnetic field.

The variation with time of the emf in the coil is shown.



The angular speed is changed to  $\frac{3\omega}{4}$ .

What is the amplitude of the emf and the time period for the variation of the emf in the coil after the change?

	Amplitude of emf/V	Time period/ms
A.	13	0.60
B.	13	1.1
C.	7.5	0.60
D.	7.5	1.1

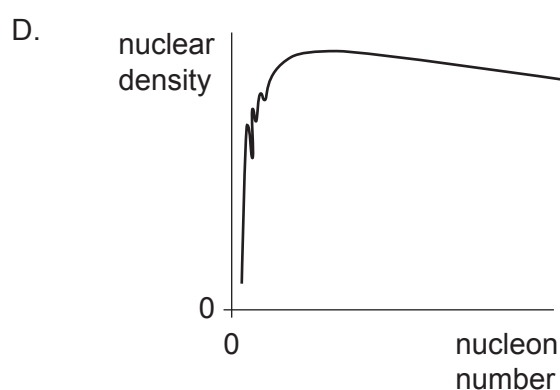
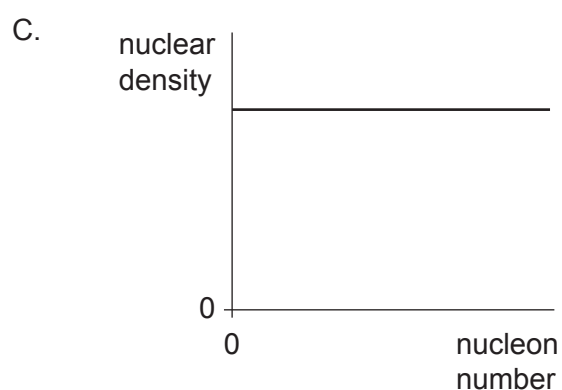
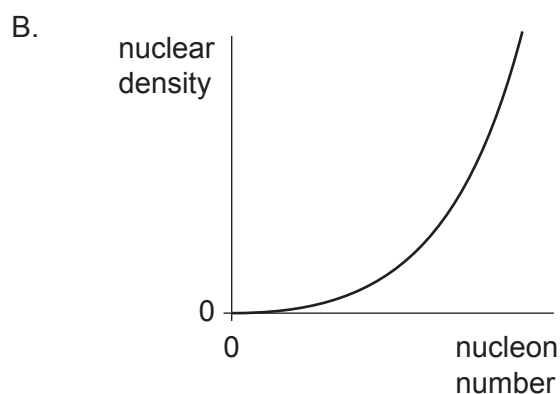
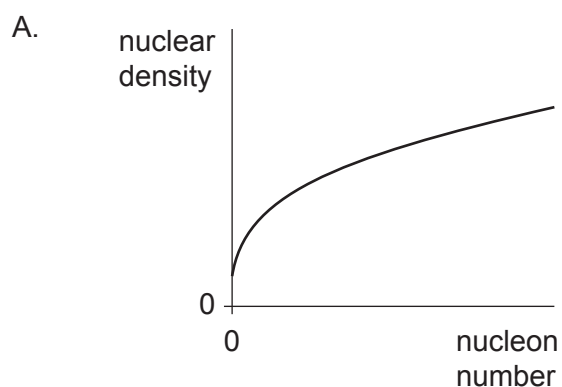
32. An ion X contains the following particles:

- 53 protons
- 89 neutrons
- 54 electrons.

What is the nuclear notation for X?

- A.  ${}_{53}^{142}\text{X}$
- B.  ${}_{53}^{89}\text{X}$
- C.  ${}_{54}^{143}\text{X}$
- D.  ${}_{54}^{107}\text{X}$

33. What is the variation with nucleon number of the density of nuclei?



34. A photoelectron is emitted when a photon of energy  $E$  is incident on a metal surface.

The work function of the surface is  $\Phi$ .

What is the maximum possible speed of the photoelectron as it leaves the surface?

A.  $\sqrt{\frac{2(E - \Phi)}{m_e}}$

B.  $\sqrt{\frac{E - \Phi}{m_e}}$

C.  $\sqrt{\frac{E - \Phi}{m_e h}}$

D.  $\sqrt{\frac{2(E - \Phi)}{m_e h}}$

35. In a Compton scattering experiment a photon of wavelength  $\lambda_0$  and frequency  $f_0$  interacts with an electron.

After the interaction the wavelength and frequency of the photon are  $\lambda$  and  $f$ .

What are  $\frac{\lambda}{\lambda_0}$  and  $\frac{\lambda \times f}{\lambda_0 \times f_0}$ ?

	$\frac{\lambda}{\lambda_0}$	$\frac{\lambda \times f}{\lambda_0 \times f_0}$
A.	Greater than 1	Equal to 1
B.	Greater than 1	Less than 1
C.	Less than 1	Equal to 1
D.	Less than 1	Less than 1

36. Three products of radioactive decay are:

- I. alpha particles
- II. beta particles
- III. gamma photons.

Which products can be deflected by both magnetic and electric fields?

- A. I and II only
- B. I and III only
- C. II and III only
- D. I, II and III

37. A nucleus of nuclide X decays.

Which series of emissions will produce an isotope of X?

- A. One  $\alpha$  and two  $\beta^-$
- B. One  $\alpha$  and two  $\beta^+$
- C. Two  $\alpha$  and two  $\beta^-$
- D. Two  $\alpha$  and two  $\beta^+$

38. A suitable material for use as a moderator in a nuclear reactor is...

- A. cadmium.
- B. concrete.
- C. uranium-238.
- D. water.

39. In a simple model of a nuclear reactor, four neutrons are emitted per fission on average.

The average number of neutrons absorbed by the control rods is  $N_c$  per fission.

The average number of neutrons that are lost through the walls of the reactor is  $N_1$  per fission.

Any remaining neutrons induce further fissions.

What are possible values for  $N_c$  and  $N_1$  for the reactor to maintain a steady reaction?

	$N_c$	$N_1$
A.	1	1
B.	1	3
C.	2	1
D.	2	2

40. A star has a parallax angle of  $1 \times 10^{-2}$  arc-second at the orbit of the Earth.

What is the distance from the Sun to the star?

- A. 0.01 pc
  - B. 0.02 pc
  - C. 50 pc
  - D. 100 pc
-